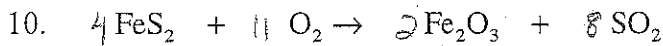
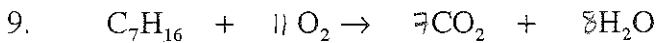
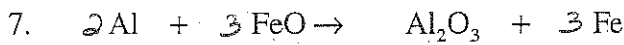
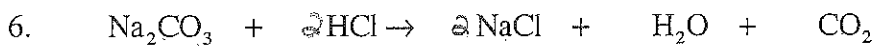
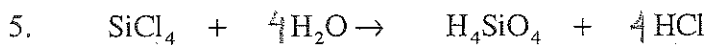
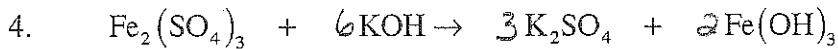



Review for Balancing Quiz

Name _____

Balance the following equations.

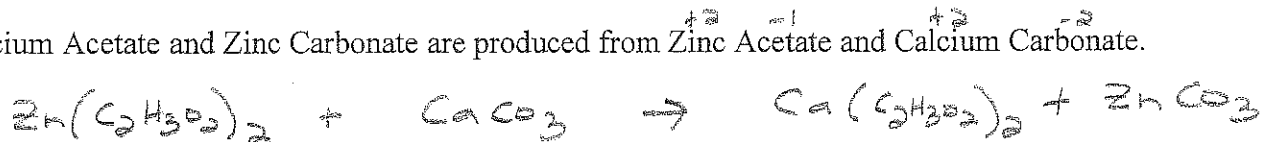


Convert the following to a formula equation and balance.


12. Potassium Nitrite and Barium Bromide react together to form Potassium Bromide and Barium Nitrite.



13. Calcium Acetate and Zinc Carbonate are produced from Zinc Acetate and Calcium Carbonate.



14. Nitrogen and Oxygen produce Dinitrogen Monoxide.



Label the indicated reactions from above as (S) synthesis, (D) decomposition, (SR) single replacement or (DR) double replacement.

1. S 2. DR 4. DR 7. SR 8. S 11. D 12. DR 13. DR 14. S