

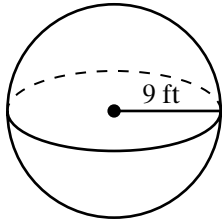
Skill: Cones, Pyramids, and Spheres

Investigation 4

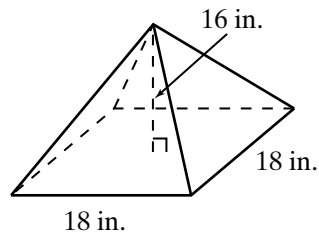
Filling and Wrapping

Find the volume of each figure to the nearest cubic unit.

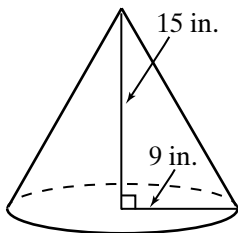
1.



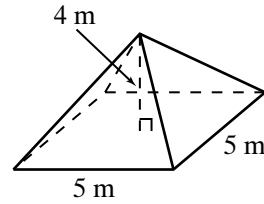
2.



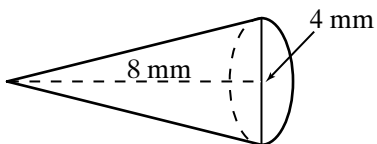
3.



4.



5.



6.

